

Examination practice questions

You should have:

A ruler, protractor, compasses, a pen, pencil, eraser, calculator.
For some questions, you may need tracing paper.

Instructions

- Use **black** ink or ball-point pen.
- Answer the questions in the spaces provided – *there may be more space than you need.*
- **Calculators may be used.**

Information

- The marks for each question are shown in brackets.
- If the number of marks for two similar questions isn't the same, this is likely due to them being modelled on different specifications. In this case, it is worth considering both mark schemes.
- Use the number of marks for each question as a guide as to how much time to spend on each question. As a rough guide, you can multiply the number of marks by 1.2 to see how many minutes you should spend on a question.
- Questions will generally get more challenging as the document progresses. Some of the latter questions will go beyond the core grade level for this topic.

Advice

- Read each question carefully before you start to answer it.
- Don't forget to have fun.
- Check your answers at the end.

Q1.

AtoZrevision.com

Dom and Jenny are playing a game.

Dom has **four hundred and thirty** points.

Write this number in figures.

430
.....

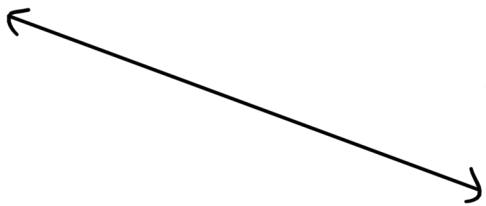
(1 mark)

Q2.

AtoZrevision.com

Match the words to the correct number.

Three hundred and six



3006

36

306

3600

3060

(1 mark)

Q3.

AtoZrevision.com

Match the words to the correct number.

Three thousand and six



3006

36

306

3600

3060

(1 mark)

Q4.

AtoZrevision.com

Match the words to the correct number.

Three thousand and sixty

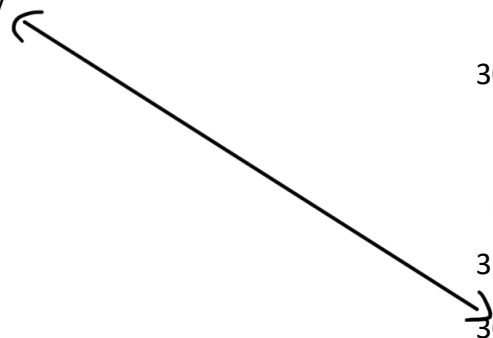
3006

36

306

3600

3060



(1 mark)

Q5.

AtoZrevision.com

Match the words to the correct number.

Three thousand six hundred

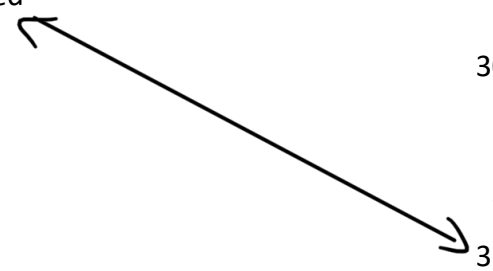
3006

36

306

3600

3060



(1 mark)

Q6.

AtoZrevision.com

Write sixteen point two four in figures.

16.24

(1 mark)

Q7.

AtoZrevision.com

Write down the number **one thousand two hundred and eighty four** in figures.

1284

(1 mark)

Q8.

AtoZrevision.com

Write four thousand and seventeen in figures.

4017

(1 mark)

Q9.

AtoZrevision.com

Write the number **five thousand nine hundred and five** in figures.

5905

(1 mark)

Q10.

AtoZrevision.com

Write down the number **six thousand five hundred and seven** in figures.

6507

(1 mark)

Q11.

AtoZrevision.com

Write the number **two thousand, two hundred and twelve** in figures.

2212

(1 mark)

Q12.

AtoZrevision.com

Write the number **ten thousand five hundred and forty seven** in figures.

10547

(1 mark)

Q13.

AtoZrevision.com

Write the number **fifteen thousand, five hundred and seventy two** in figures.

15572

(1 mark)

Q14.

AtoZrevision.com

Write down the number **forty three thousand and twenty seven** in figures.

43027

(1 mark)

Q15.

AtoZrevision.com

Write the number **seven thousand, seven hundred and seventy two** in figures.

7772

(1 mark)

Q16.

AtoZrevision.com

Write down in figures the number **forty-nine thousand and forty-five**.

49045

(1 mark)

Q17.

AtoZrevision.com

Hussain works in a bakery.

Hussain's boss earns **fifty-one thousand five hundred and fifty pounds** a year.

Write this amount in figures.

£51,550

(1 mark)

Q18.

AtoZrevision.com

Write 100 million in figures.

100,000,000

(1 mark)

Q19.

AtoZrevision.com

Write in figures the number that is one less than nine thousand.

8999

(1 mark)

Q20.

AtoZrevision.com

Write in figures the number that is one less than eight thousand and fifty two.

8051

(1 mark)

Q21.

AtoZrevision.com

The table shows the heights of six mountains.

Mountain	Height (metres)
Diran	7266
Lhotse	8516
K12	7428
Cho Oyu	8188
Jannu	7711
Makalu	8485

The mountain Lhotse is eight thousand five hundred and sixteen metres high.

Write this number in figures.

8516

(1 mark)